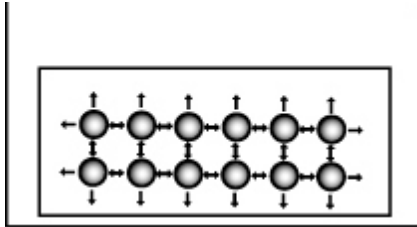


Name: _____

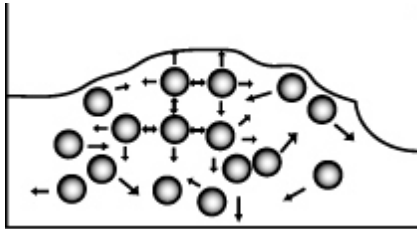
Changes of state

The diagrams below show *water* particles at 5 different temperatures. Can you guess the temperature for each diagram? Give reasons for your answer using the position and movement of the particles as evidence.



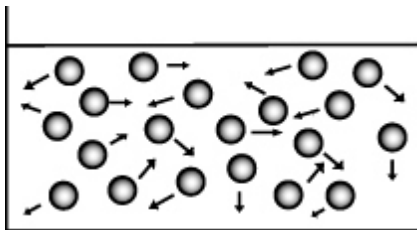
Temperature _____ °C

Reason: _____



Temperature _____ °C

Reason: _____



Temperature _____ °C

Reason: _____

