


Multiplying by



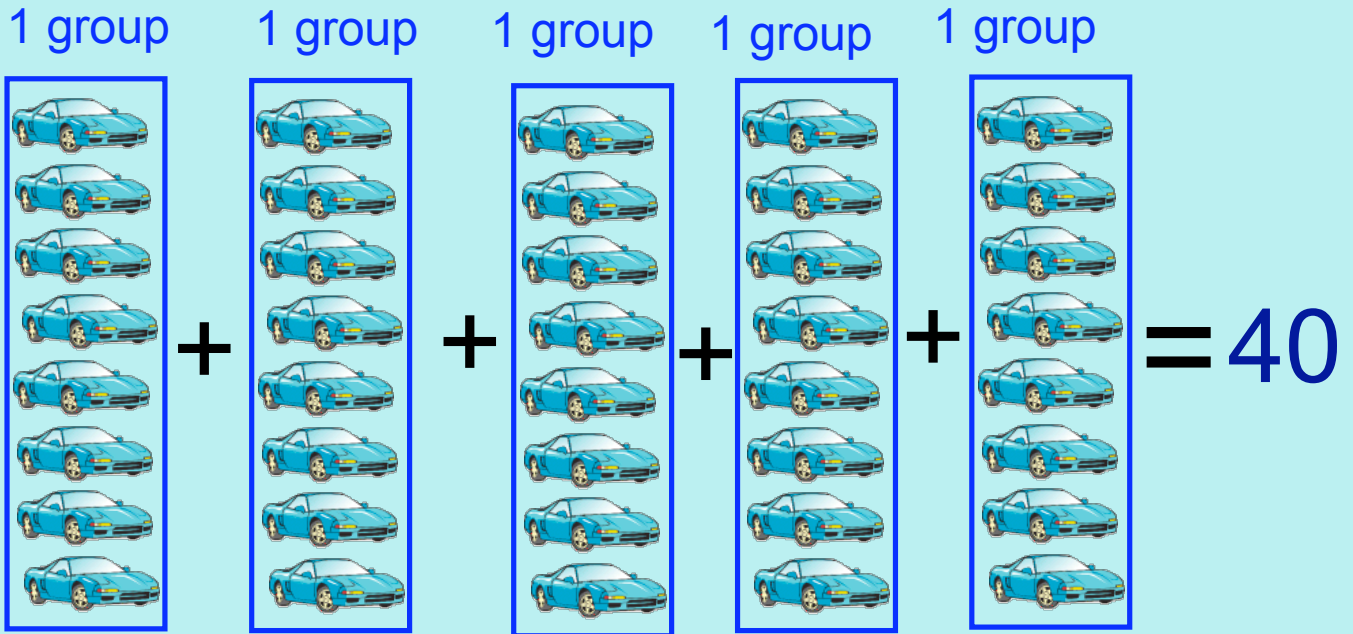
8's

Multiplication

What is it?

Answer

Multiplication

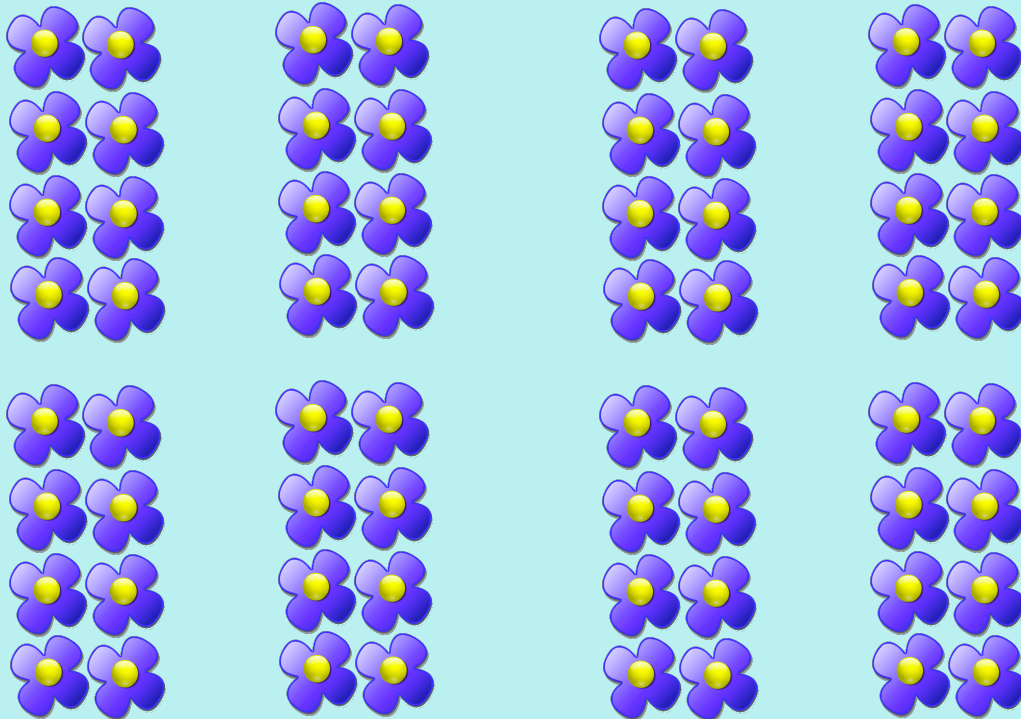


8 \times 5 = 40

8 / group 5 groups

Multiplication

What multiplication problem do the pictures make up?



Click inside the box to find the answer?

$$\square \times \square = \square$$

Multiplication

What multiplication problem do the pictures make up?




Click inside the box to find the answer?

$$\square \times \square = \square$$

Multiplication

What multiplication problem do the pictures make up?



Click inside the box to find the answer?

$$\square \times \square = \square$$

Multiplication

Drag the Earth to make the following problem.
Next count the Earths to find your answer.



$$8 \times 2 =$$

Multiplication

Drag the crayon to make the following problem.
Next count the crayons to find your answer.



$$8 \times 4 =$$

Drag the answer to the correct equation.

$8 \times 7 =$

$8 \times 4 =$

$8 \times 3 =$

$8 \times 1 =$

$8 \times 5 =$

$8 \times 2 =$

$8 \times 6 =$

$8 \times 10 =$

$8 \times 9 =$

$8 \times 8 =$

24 40

8

16 64

56

72 32

48

80

Turn on the function machine.

3 10
4 2
6 5
8 7
9 1

Grab a number and tell what that answer would be if you multiplied it by 8.



Then drag it through the machine to see if you were correct.

Click on the pictures to practice the skill.

