


Name _____

Candy Bar Fractions

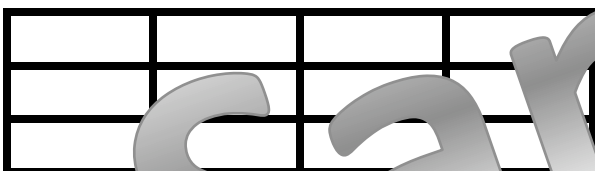
Shade in two-thirds of the candy bar.




Shade in eleven-twelfths of the candy bar.




Shade $\frac{1}{2}$ of the candy bar.



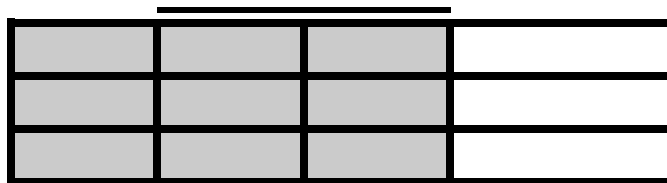
Shade $\frac{9}{12}$ of the candy bar.



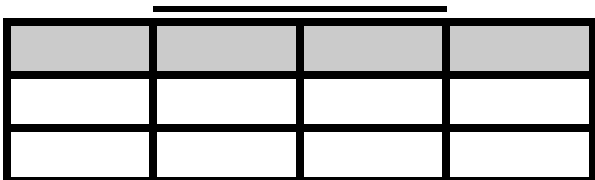
How much of the candy bar is shaded?



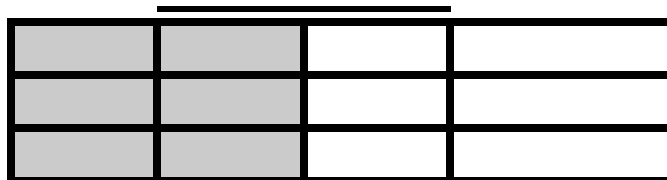
How much of the candy bar is shaded?



How much of the candy bar is shaded?



How much of the candy bar is shaded?



Show the fraction $1\frac{3}{4}$

