

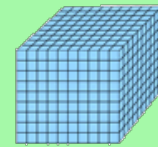


BASE TEN BLOCKS BASE TEN BLOCKS BASE TEN BLOCKS
 What is the value of each group of blocks.

■ = 1

 = 100

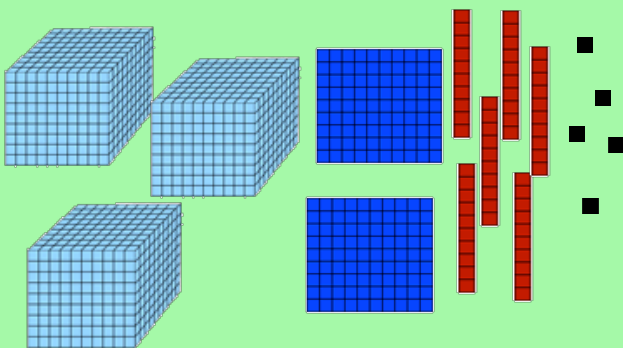
 = 10

 = 1,000

BASE TEN BLOCKS BASE TEN BLOCKS BASE TEN BLOCKS BASE TEN BLOCKS

How many blocks are represented?

Write that number on the line?

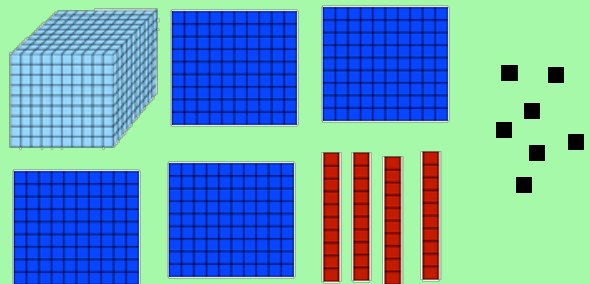


= _____

BASE TEN BLOCKS BASE TEN BLOCKS BASE TEN BLOCKS BASE TEN BLOCKS

How many blocks are represented?

Write that number on the line?

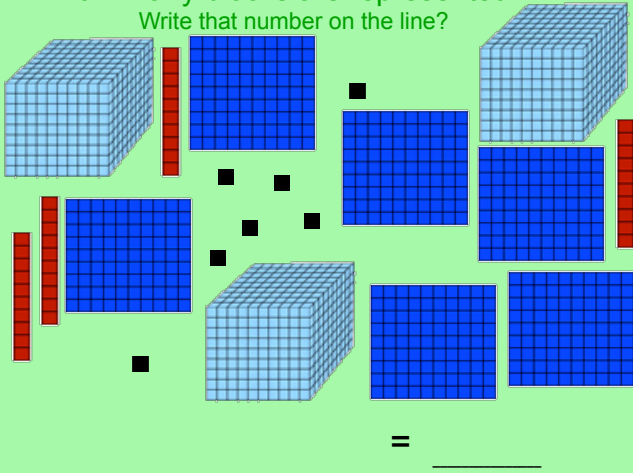


= _____

BASE TEN BLOCKS BASE TEN BLOCKS BASE TEN BLOCKS BASE TEN BLOCKS

How many blocks are represented?

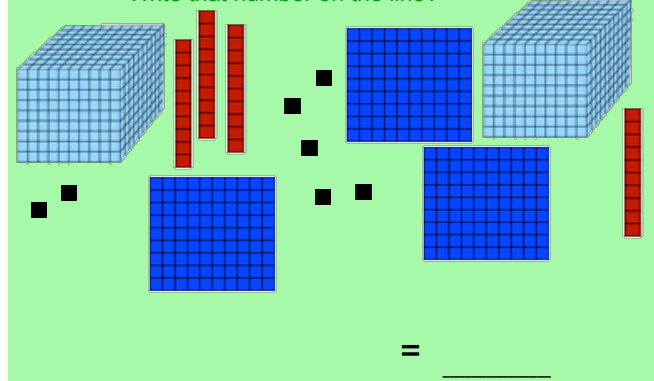
Write that number on the line?



BASE TEN BLOCKS BASE TEN BLOCKS BASE TEN BLOCKS BASE TEN BLOCKS

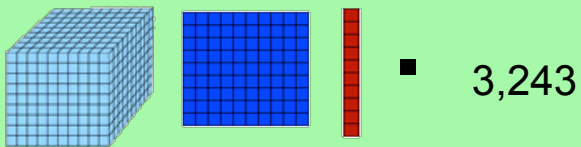
How many blocks are represented?

Write that number on the line?



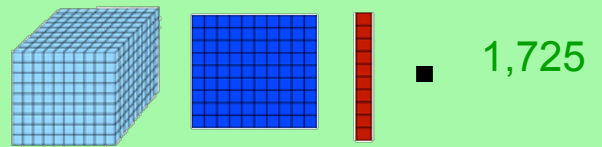
BASE TEN BLOCKS BASE TEN BLOCKS BASE TEN BLOCKS BASE TEN BLOCKS

Drag the blocks down to make match the number on the right?



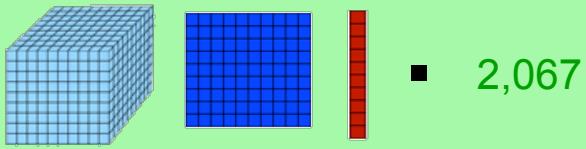
BASE TEN BLOCKS BASE TEN BLOCKS BASE TEN BLOCKS BASE TEN BLOCKS

Drag the blocks down to make match the number on the right?



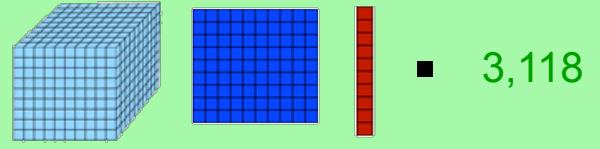
BASE TEN BLOCKS BASE TEN BLOCKS BASE TEN BLOCKS BASE TEN BLOCKS

Drag the blocks down to make match the number on the right?



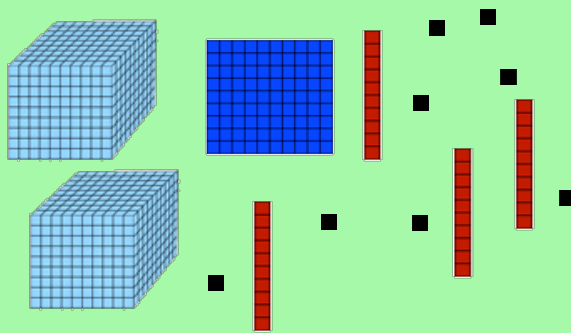
BASE TEN BLOCKS BASE TEN BLOCKS BASE TEN BLOCKS BASE TEN BLOCKS

Drag the blocks down to make match the number on the right?



BASE TEN BLOCKS BASE TEN BLOCKS BASE TEN BLOCKS BASE TEN BLOCKS

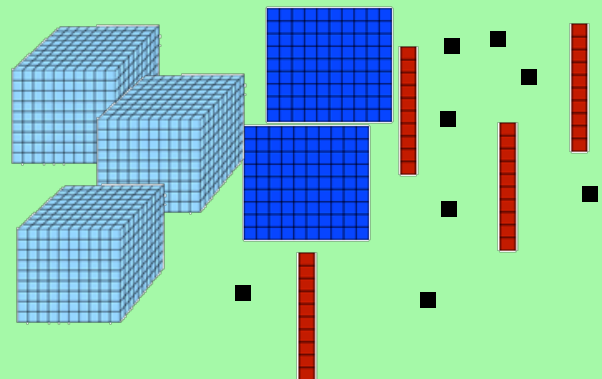
Click on the standard number that matches the BASE TEN BLOCKS.



- 3,148
- 2,148
- 3,248
- 2,218

BASE TEN BLOCKS BASE TEN BLOCKS BASE TEN BLOCKS BASE TEN BLOCKS

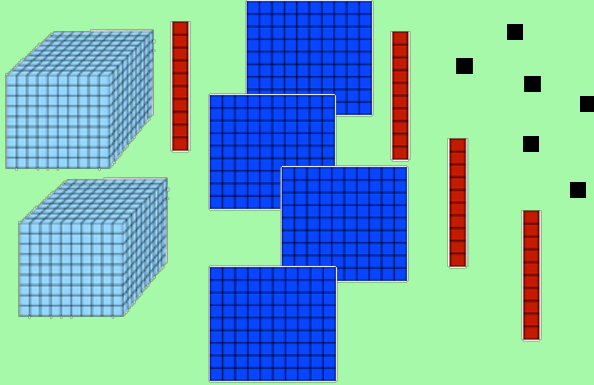
Click on the standard number that matches the BASE TEN BLOCKS.



- 3,148
- 2,148
- 3,248
- 2,218

BASE TEN BLOCKS BASE TEN BLOCKS BASE TEN BLOCKS BASE TEN BLOCKS

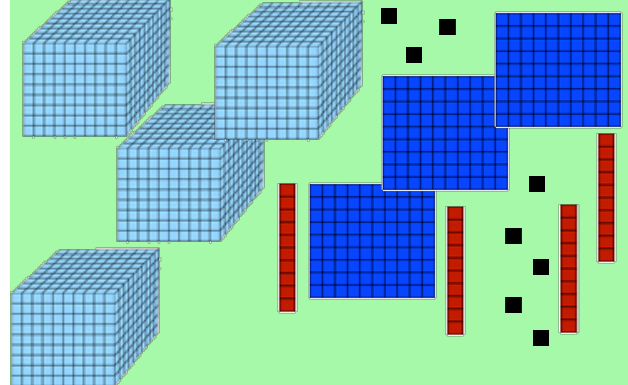
Click on the standard number that matches the BASE TEN BLOCKS.



3,446 4,246 3,446 2,446

BASE TEN BLOCKS BASE TEN BLOCKS BASE TEN BLOCKS BASE TEN BLOCKS

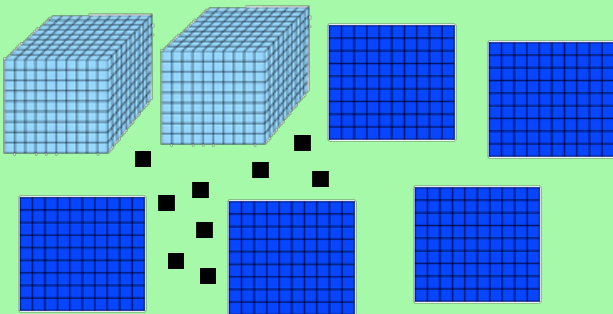
Click on the standard number that matches the BASE TEN BLOCKS.



4,148 4,348 4,248 4,218

BASE TEN BLOCKS BASE TEN BLOCKS BASE TEN BLOCKS BASE TEN BLOCKS


Click on the standard number that matches the BASE TEN BLOCKS.



3,149 2,049 2,249 2,509

BASE TEN BLOCKS BASE TEN BLOCKS BASE TEN BLOCKS BASE TEN BLOCKS

Click on the blocks to go to a web link to practice the skill.



Yes!! Great Job!! Click on the vulture to get a round of applause!!



BACK

Yes!! Great Job!! Click on the vulture to get a round of applause!!



BACK

Yes!! Great Job!! Click on the vulture to get a round of applause!!



BACK

Yes!! Great Job!! Click on the vulture to get a round of applause!!



BACK

Yes!! Great Job!! Click on the vulture to get a round of applause!!



BACK

Not quite! Click on the vulture for some advice.



BACK

Not quite! Click on the vulture for some advice.



BACK

Not quite! Click on the vulture for some advice.



BACK

Not quite! Click on the vulture for some advice.



BACK

Not quite! Click on the vulture for some advice.



BACK